


Name \_\_\_\_\_ Datum \_\_\_\_\_ Klasse \_\_\_\_\_

© <http://aufgaben.schulkreis.de>

## Uhrzeit, Blatt 5









Genauigkeit: 1 Min.

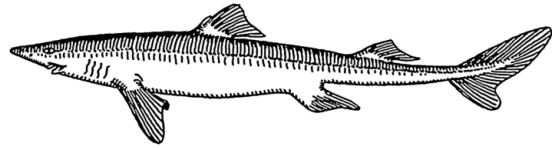
Bestimme die Uhrzeiten.



11:08 Uhr

23:08 Uhr





# Lösung: Uhrzeit, Blatt 5

Genauigkeit: 1 Min.

Musterlösung:

11:08 Uhr / 23:08 Uhr

10:42 Uhr / 22:42 Uhr

8:44 Uhr / 20:44 Uhr

2:09 Uhr / 14:09 Uhr

4:53 Uhr / 16:53 Uhr

11:26 Uhr / 23:26 Uhr

3:49 Uhr / 15:49 Uhr

6:40 Uhr / 18:40 Uhr

8:24 Uhr / 20:24 Uhr