
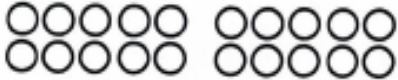

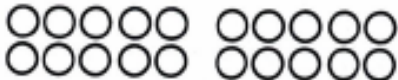


 $4 + 8 = \square$
 $\square + \square + \square = \square$
10

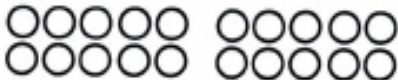

 $8 + 4 = \square$
 $\square + \square + \square = \square$



 $9 + 7 = \square$
 $\square + \square + \square = \square$

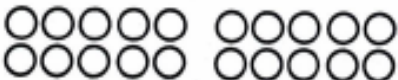

 $7 + 9 = \square$
 $\square + \square + \square = \square$

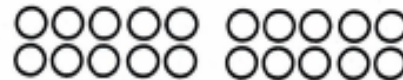

 $3 + 9 = \square$
 $\square + \square + \square = \square$


 $9 + 3 = \square$
 $\square + \square + \square = \square$


 $8 + 9 = \square$
 $\square + \square + \square = \square$


 $9 + 8 = \square$
 $\square + \square + \square = \square$


 $7 + 5 = \square$
 $\square + \square + \square = \square$


 $5 + 7 = \square$
 $\square + \square + \square = \square$

$5 + 8 = \square$
 $\square + \square + \square = \square$
 10

$8 + 5 = \square$
 $\square + \square + \square = \square$

$8 + 3 = \square$
 $\square + \square + \square = \square$

$3 + 8 = \square$
 $\square + \square + \square = \square$

$9 + 9 = \square$
 $\square + \square + \square = \square$

$6 + 6 = \square$
 $\square + \square + \square = \square$

$8 + 8 = \square$
 $\square + \square + \square = \square$

$7 + 7 = \square$
 $\square + \square + \square = \square$

Fehler gemacht?
Hier kannst du es
nochmal versuchen.

$\square + \square = \square$
 $\square + \square + \square = \square$

$\square + \square = \square$
 $\square + \square + \square = \square$